

Vermenigvuldigen tot en met de tafel van 5

1. Maak uit de optelsommen vermenigvuldigingen:



3	+	3	+	3	=	
---	---	---	---	---	---	--

3	x	3	=	
---	---	---	---	--



4	+	4	+	4	+	4	+	4	=	
---	---	---	---	---	---	---	---	---	---	--

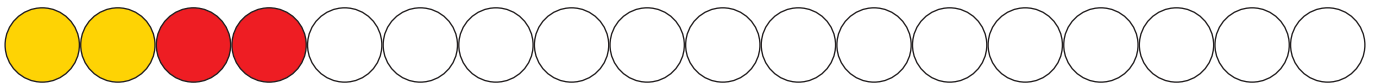
	x		=	
--	---	--	---	--



5	+	5	+	5	+	5	+	5	+	5	+	5	=	
---	---	---	---	---	---	---	---	---	---	---	---	---	---	--

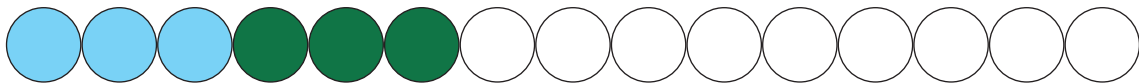
	x		=	
--	---	--	---	--

2. Kleur de rondjes in, passend bij de opgaven:



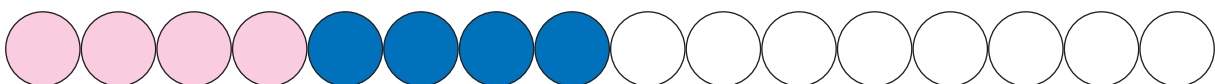
2	+	2	+	2	+	2	+	2	+	2	+	2	+	2	=	
---	---	---	---	---	---	---	---	---	---	---	---	---	---	---	---	--

	x		=	
--	---	--	---	--



3	+	3	+	3	+	3	+	3	=	
---	---	---	---	---	---	---	---	---	---	--

	x		=	
--	---	--	---	--



4	+	4	+	4	+	4	=	
---	---	---	---	---	---	---	---	--

	x		=	
--	---	--	---	--