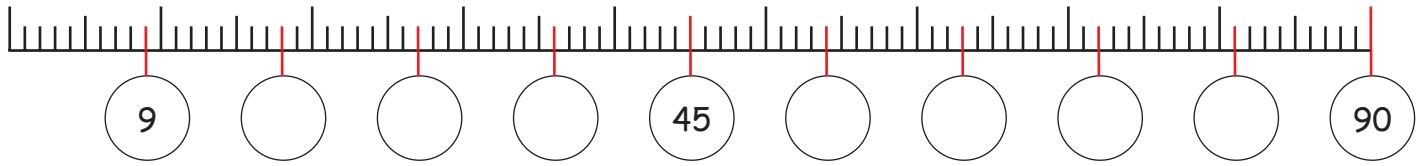



## Vermenigvuldigen: de tafel van 9

### 1. Reken verder met de tafel van 9.




### 2. Het dubbele.




$1 \times 9 = 9$



$2 \times 9 = \underline{\quad}$




$4 \times 9 = \underline{\quad}$




$8 \times 9 = \underline{\quad}$




$3 \times 9 = \underline{\quad}$




$6 \times 9 = \underline{\quad}$



$7 \times 9 = \underline{\quad}$




### 3. De helft.




$10 \times 9 = \underline{\quad}$



$5 \times 9 = \underline{\quad}$



$10 \times 9 = \underline{\quad}$



$9 \times 9 = \underline{\quad}$

### 4. Een tabel met prijzen.

Stuk	Prijs	Stuk	Prijs
1	9 €	6	€
2	€	7	€
3	€	8	€
4	€	9	€
5	€	10	€



Één reuzengebakje-kost 9 €!

### 5. Familie negen.

Kleur alle getallen, die zich door 9 laten delen, met een kleurtje.

9									
6	45	3	98	21	14				
18	35	58	23	36	11				
4	86	27	95	0	43	54	2	78	63
72	69	34	81	62	90	29	47	9	84