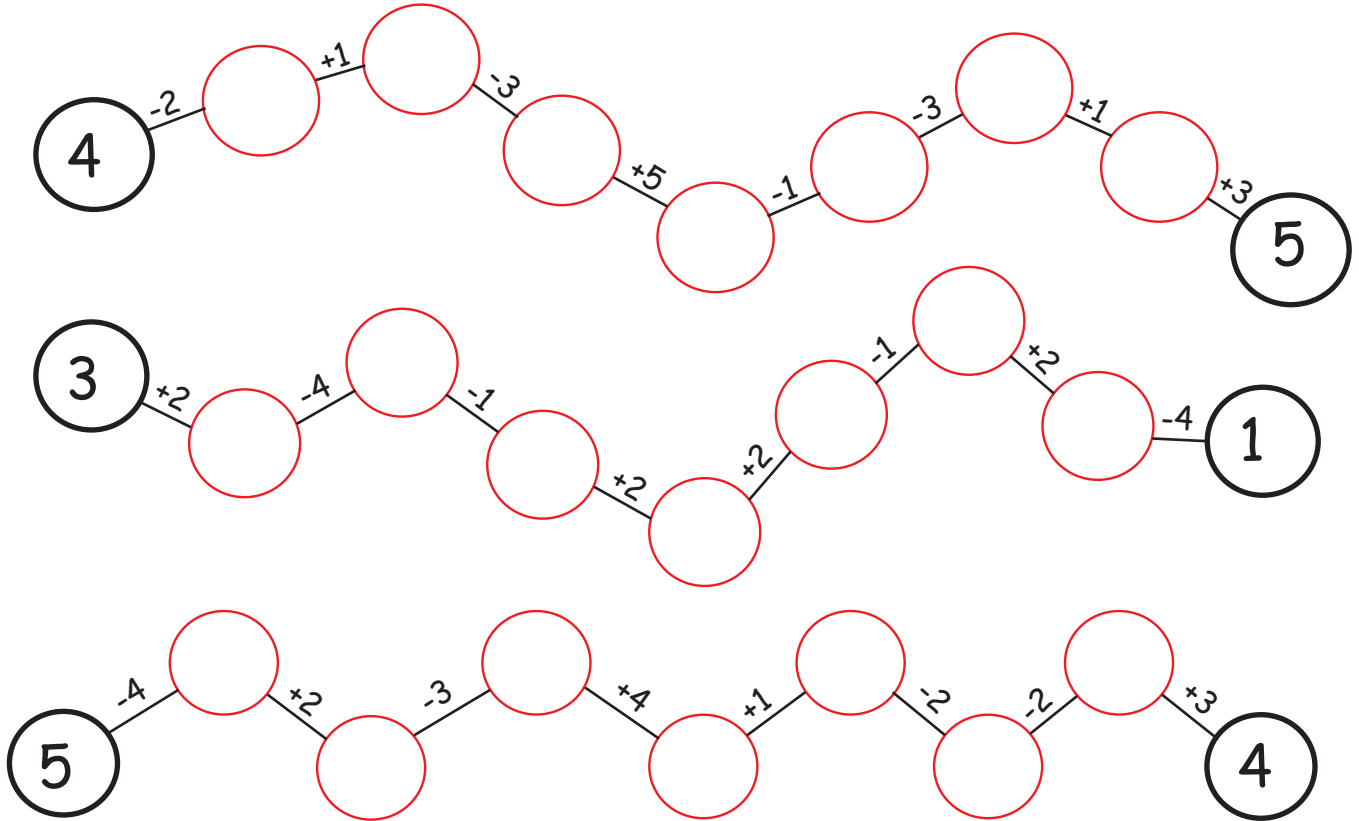


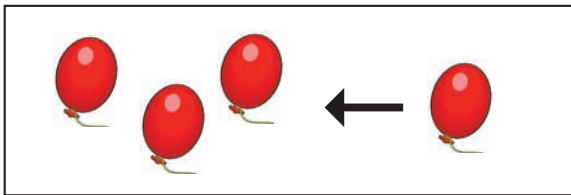
Plus en min tot 5




Reken steeds met de laatste uitkomst verder.
Het getal aan het einde, laat je zien, of je de sommen goed hebt uitgerekend.



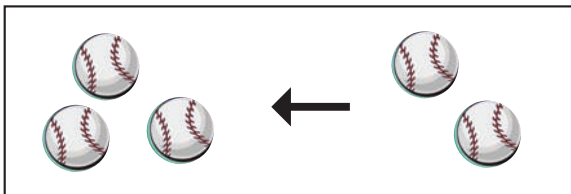
Erbij of eraf?
Schrijf de sommen op en los ze op.



$$\underline{\quad + \quad = \quad}$$



$$\underline{\quad - \quad = \quad}$$




$$\underline{\quad + \quad = \quad}$$


Aftrekken!

Trek de doorgestreepte dingen er af en schrijf de som op.

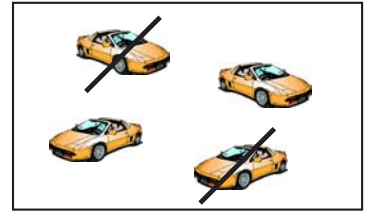
Bijv:



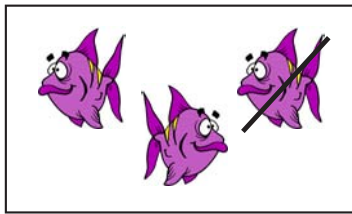
$$4 - 1 = 3$$



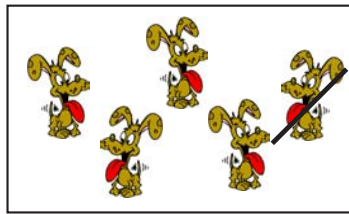
$$- =$$




$$- =$$




$$- =$$




$$- =$$




$$- =$$



$$- =$$



$$- =$$



$$- =$$

Bereken en schrijf de uitkomst in het vakje!

$$2 + 1 = \square$$

$$3 + \square = 5$$

$$4 = 3 + \square$$

$$5 - 1 = \square$$

$$3 - 1 = \square$$

$$2 = 4 - \square$$

$$1 - \square = 0$$

$$2 - 1 = \square$$

$$1 = 0 + \square$$

$$3 + 1 = \square$$

$$1 + 3 = \square$$

$$5 = 4 + \square$$

$$5 - 2 = \square$$

$$5 - \square = 1$$

$$0 = 5 - \square$$

$$1 + \square = 2$$

$$3 - 3 = \square$$

$$2 = 5 - \square$$

De oplossing en zeer veel andere werkbladen om gratis te downloaden:

www.aduis.nl. Neemt u een kijkje.