












Optellen - getallengebied tot 20

Kleur de bloemen geel en blauw in. Tonen verschillende manieren om tot het nummer dat aan de linkerkant te komen. Schrijf de berekening op. Een voorbeeld:

12		$10 + 2$
12		$\underline{\quad} + \underline{\quad}$
12		$\underline{\quad} + \underline{\quad}$
12		$\underline{\quad} + \underline{\quad}$
15		$\underline{\quad} + \underline{\quad}$
15		$\underline{\quad} + \underline{\quad}$
15		$\underline{\quad} + \underline{\quad}$
18		$\underline{\quad} + \underline{\quad}$
18		$\underline{\quad} + \underline{\quad}$
20		$\underline{\quad} + \underline{\quad}$
20		$\underline{\quad} + \underline{\quad}$