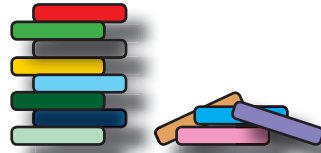


# Onder de twintig



Tina bouwt met 12 bouwstenen een toren.

12



4 ervan vallen naar beneden.

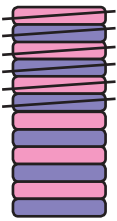
- 4

Hoeveel blokken heeft de toren nu?

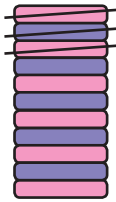
= 8



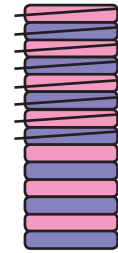
Lees hardop voor en reken uit.



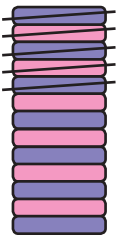
$12 - 6 = \underline{\quad}$



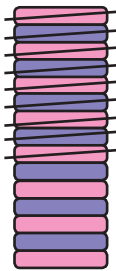
$11 - 3 = \underline{\quad}$




$14 - 8 = \underline{\quad}$



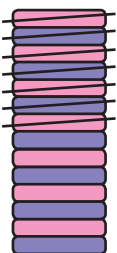
$13 - 5 = \underline{\quad}$



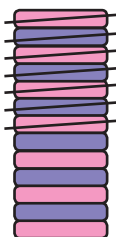
$15 - 9 = \underline{\quad}$



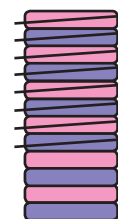
$12 - 3 = \underline{\quad}$



$15 - 7 = \underline{\quad}$



$13 - 6 = \underline{\quad}$



$11 - 8 = \underline{\quad}$