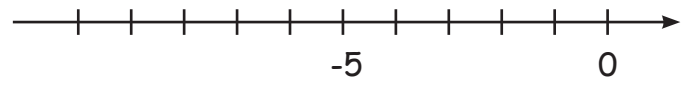


Negatieve getallen optellen en aftrekken

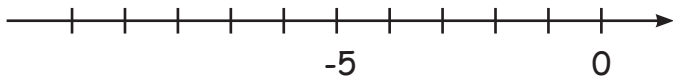
Geef de volgende rekenopgaven op de getallenlijn weer!



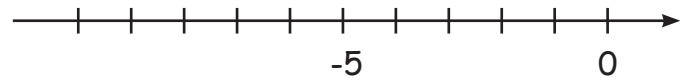
$-6 + 3 = -3$



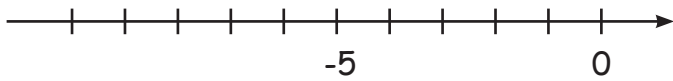
$-9 + 5 =$



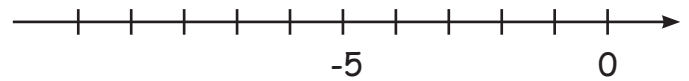
$-4 - 4 =$



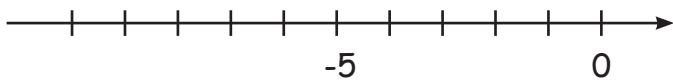
$-3 + 3 =$



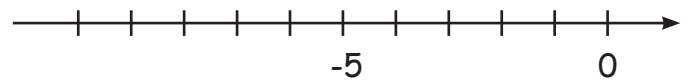
$-6 - 3 =$



$-2 - 8 =$



$-8 + 4 =$

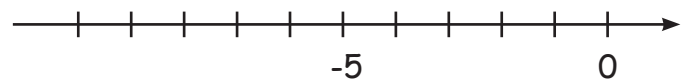


$-7 + 4 =$

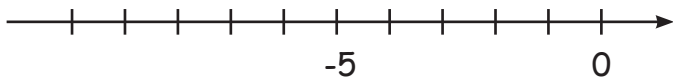
Schrijf de rekenopgaven, die op de getallenlijn worden weergegeven, op de lijnen!



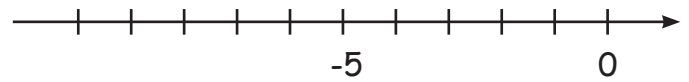
$-9 + 7 = -2$



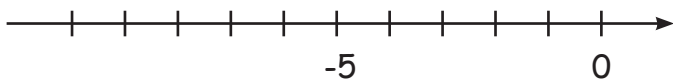
$\underline{\hspace{2cm}}$



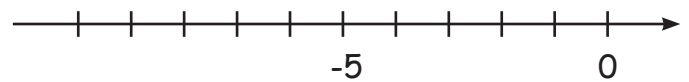
$\underline{\hspace{2cm}}$



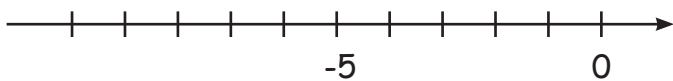
$\underline{\hspace{2cm}}$



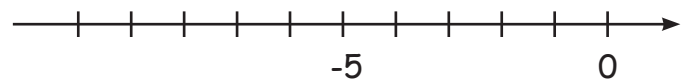
$\underline{\hspace{2cm}}$



$\underline{\hspace{2cm}}$



$\underline{\hspace{2cm}}$




$\underline{\hspace{2cm}}$

Negatieve getallen optellen en aftrekken

Bereken de opgaven! Voor elk goed antwoord, is er een letter voor de oplossing.
Vul ze in het oplossingsveld in!

- | | | |
|-----------------------|------------------------|------------------------|
| a.) $-4 + 6 =$ _____ | f.) $-14 + 13 =$ _____ | k.) $-24 - 26 =$ _____ |
| b.) $-9 + 22 =$ _____ | g.) $-18 + 8 =$ _____ | l.) $-27 + 32 =$ _____ |
| c.) $-8 - 6 =$ _____ | h.) $15 - 25 =$ _____ | m.) $-28 + 21 =$ _____ |
| d.) $9 - 17 =$ _____ | i.) $12 - 24 =$ _____ | n.) $32 - 35 =$ _____ |
| e.) $8 - 12 =$ _____ | j.) $20 - 31 =$ _____ | o.) $-36 + 42 =$ _____ |
| | p.) $-45 - 11 =$ _____ | |



--	--	--	--	--	--	--	--	--	--	--	--	--	--