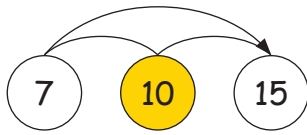


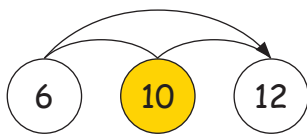
Hoeveel ontbreken er?1. Hoeveel ontbreekt er?

Reken eerst uit op hele tientallen, dan is het makkelijker om de som op te lossen.



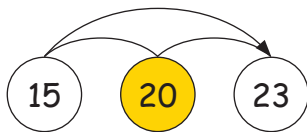
$$7 + \square = 10 + \square = 15$$

$$7 + \square = 15$$



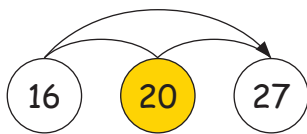
$$6 + \square = 10 + \square = 12$$

$$6 + \square = 12$$



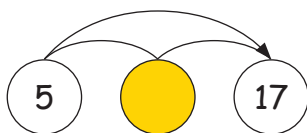
$$15 + \square = 20 + \square = 23$$

$$15 + \square = 23$$



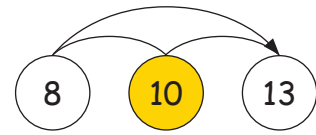
$$16 + \square = 20 + \square = 27$$

$$16 + \square = 27$$



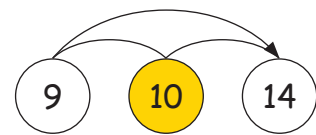
$$5 + \square = \square + \square = 17$$

$$5 + \square = 17$$



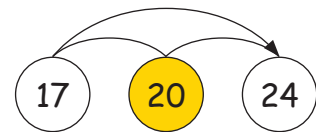
$$8 + \square = 10 + \square = 13$$

$$8 + \square = 13$$



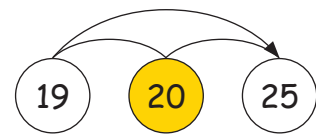
$$9 + \square = 10 + \square = 14$$

$$9 + \square = 14$$



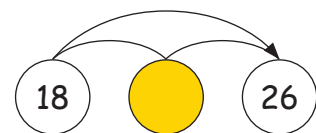
$$17 + \square = 20 + \square = 24$$

$$17 + \square = 24$$



$$19 + \square = 20 + \square = 25$$

$$19 + \square = 25$$



$$18 + \square = \square + \square = 26$$

$$18 + \square = 26$$