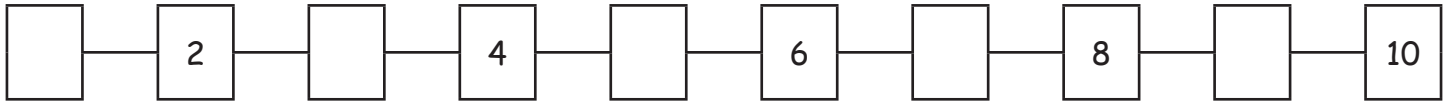


Erbij tellen

1. Vul de ontbrekende cijfers in:



2. Los de volgende sommen op:

2	+	5	=		7	+	1	=		3	+	6	=		9	+	0	=	
---	---	---	---	--	---	---	---	---	--	---	---	---	---	--	---	---	---	---	--


4	+	6	=		3	+	4	=		7	+	2	=		2	+	3	=	
---	---	---	---	--	---	---	---	---	--	---	---	---	---	--	---	---	---	---	--

3	+	1	=		1	+	2	=		5	+	5	=		4	+	4	=	
---	---	---	---	--	---	---	---	---	--	---	---	---	---	--	---	---	---	---	--


5	+	3	=		4	+	2	=		4	+	1	=		3	+	3	=	
---	---	---	---	--	---	---	---	---	--	---	---	---	---	--	---	---	---	---	--

6	+	2	=		2	+	7	=		8	+	1	=		2	+	2	=	
---	---	---	---	--	---	---	---	---	--	---	---	---	---	--	---	---	---	---	--


3. Tel het aantal ogen van de dobbelstenen bij elkaar op:



4	+	2	=		6	+	1	=		3	+	5	=		4	+	6	=	
---	---	---	---	--	---	---	---	---	--	---	---	---	---	--	---	---	---	---	--



5	+	4	=		3	+	4	=		1	+	6	=		3	+	1	=	
---	---	---	---	--	---	---	---	---	--	---	---	---	---	--	---	---	---	---	--



	+		=			+		=			+		=			+		=	
--	---	--	---	--	--	---	--	---	--	--	---	--	---	--	--	---	--	---	--